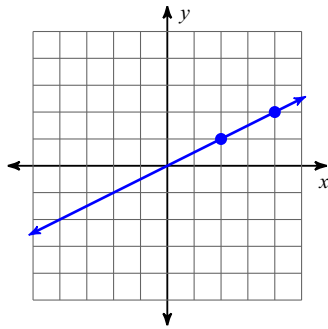


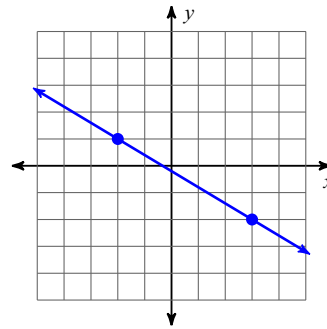
# Assignment

**Find the slope of each line.**

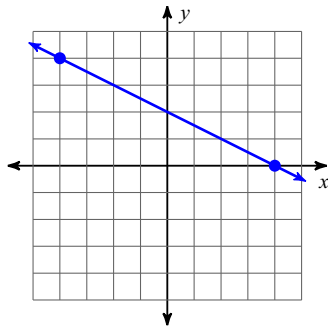
1)



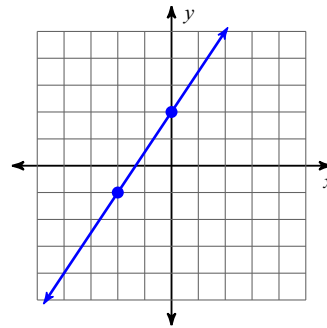
2)



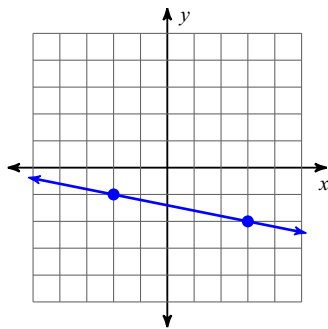
3)



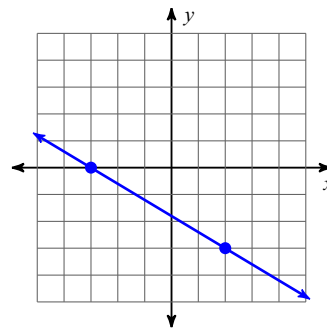
4)



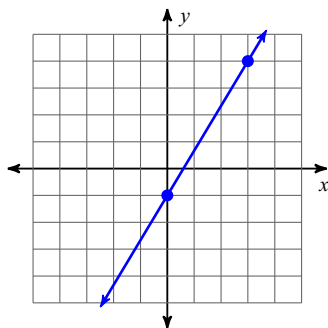
5)



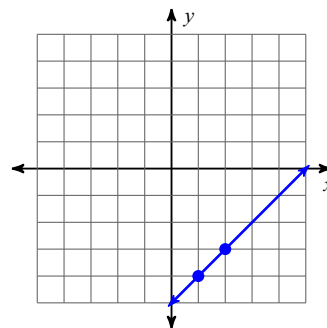
6)



7)



8)



## Answers to Assignment (ID: 1)

1)  $\frac{1}{2}$

2)  $-\frac{3}{5}$

3)  $-\frac{1}{2}$

4)  $\frac{3}{2}$

5)  $-\frac{1}{5}$

6)  $-\frac{3}{5}$

7)  $\frac{5}{3}$

8) 1